



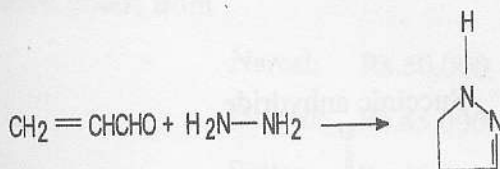
**EASTERN UNIVERSITY, SRI LANKA**  
**SECOND EXAMINATION IN SCIENCE – 2003/2004**  
**SECOND SEMESTER**  
**(June/July-2005)**  
**CH204 REACTION MECHANISM AND AROMATICITY**

Answer all questions


Time: 01 hour

1. (a) Write a mechanism for the following;

(i).



(ii)



(b) Glyceraldehyde ( $\text{CH}_2\text{OHCHOHCHO}$ ) is made from  $\text{BrCH}_2\text{CH}_2\text{CH}_2\text{OH}$ . Show how this could be done and give all essential experimental conditions.

2. (a)

(i). Outline the molecular orbitals of cyclopentadienyl system by using polygon and circle method and explain on this basis why cyclopentadienyl anion is aromatic.

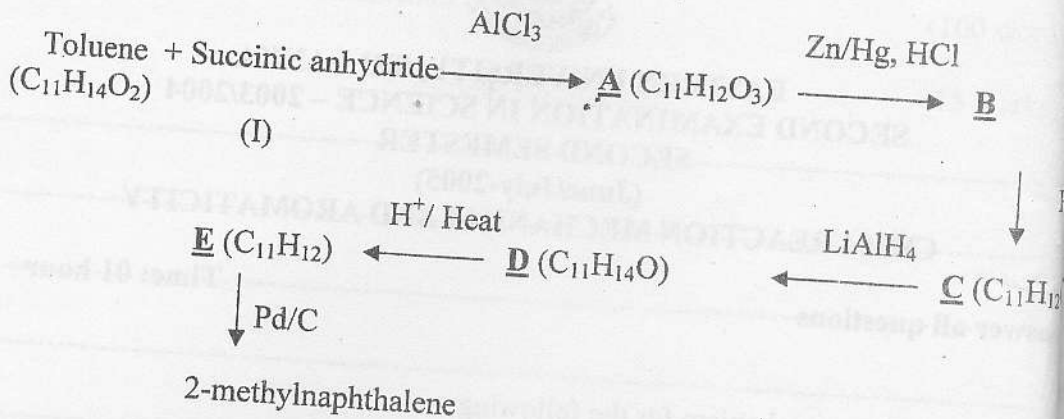
(ii). What electron distribution would you expect for the cyclopentadienyl cation?

(iii). Would you expect it to be aromatic? Explain.

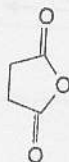
(iv). Would you expect cyclopentadienyl cation to be aromatic on the basis of Huckel's rule?

Cont..

(b). Write the structures of A, B, C, D and E in the following reaction scheme



Succinic anhydride



(I)

\*\*\*\*\*