

Eastern University, Sri Lanka
 Department of Chemistry
 First Examination in Science 2003-2004
 Second Semester-(June/July) 2005
 CH 103 Stereochemistry and Kinetic Molecular Theory



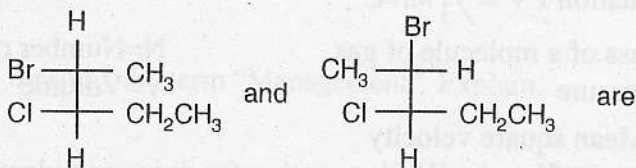
(i) Draw the structure of the following molecules

a. (2S, 3R)- 2-bromo-3-chloropentane

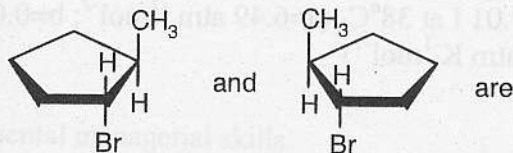
b. (S)- 2-chlorohexane

(ii) Label each pair of structures as one of the following: constitutional isomers, enantiomers, diastereomers, or identical (includes conformers). Justify your answer.

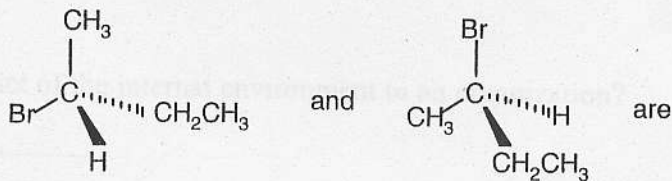
a.



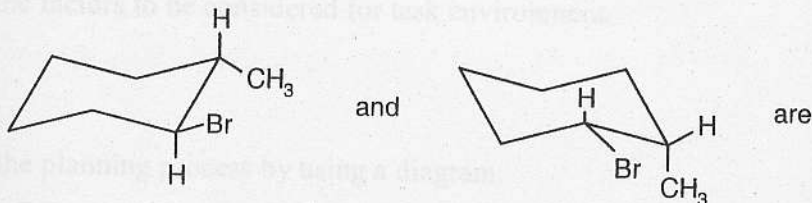
b.



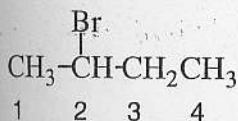
c.



d.

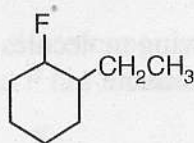


(iii) a. Draw a Newman projection about the C2-C3 bond which shows the largest groups *anti* to each other.



b. Draw a Newman projection about the C2-C3 bond for a staggered conformer that is higher in energy than the conformer you drew in part a.

2. (i) a. Draw the lower energy conformer of the *cis* geometric isomer of this compound. For the purposes of this problem, assume that F has a smaller size than CH₂CH₃.



b. Draw the lower energy conformer of the *trans* geometric isomer in part a.

(ii) a. Write down the assumptions made in deriving the kinetic molecular theory of gas.

b. Derive the equation $PV = \frac{1}{3} mNC^2$

Where m=mass of a molecule of gas

N=Number of molecules of the gas

P=Pressure

V=Volume

C^2 =Mean square velocity

c. (i) Write down the Van der Waals equation for gases and identify all the terms in it.

(ii) Calculate the pressure exerted by 3.55 moles of molecular chlorine confined in volume of 7.01 l at 38°C. (a=6.49 atm l²mol⁻²; b=0.0562 l mol⁻¹; R=0.0821 latm K⁻¹mol⁻¹)